

Maths: Speedy Six



1. $323 - 45 =$
2. $2345 + 1342 =$
3. $32 \times 3 =$
4. What is 15 minutes before 3.00pm?
5. Round 56 to the nearest 10.
6. How many sides does a hexagon have?



1. What are all the multiples of 4 between 50 and 60?
2. What is 56.8 divided by 10?
3. What $\frac{2}{3}$ of 9? (remember...divide by the bottom and times by.....)
4. What is 16 minutes before 3.10pm?
5. Round 456 to the nearest 10.
6. How many edges does a cube have?



Reading Comprehension
Please complete the reading comprehension.


Spellings

<u>Green</u>	<u>Purple</u>
made	tight
maid	tighter
week	tightest
weak	tightness
piece	baby
peace	rabbit
here	only
hear	over
different	calendar
physical	popular


Optional Maths Extension:
One bonus house point available

What time is it?


INSTRUCTIONS: Write the time below each clock.




:



:



:



:

Homework is due in on 14th March.